

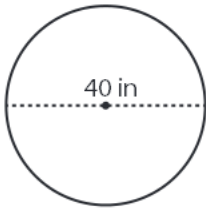
Name : _____

Score : _____

Circle - Circumference

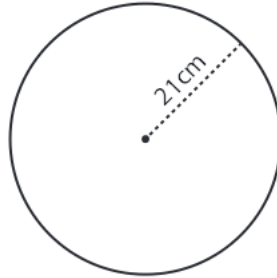
Find the circumference of each circle. Round the answer to tenth decimal place. (use $\pi=3.14$)

1)



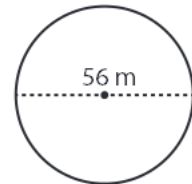
Circumference = _____

2)



Circumference = _____

3)



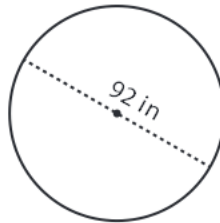
Circumference = _____

4)



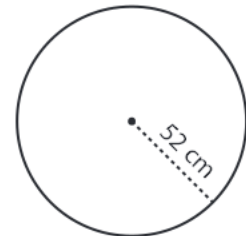
Circumference = _____

5)



Circumference = _____

6)



Circumference = _____

7) A car wheel has a diameter of 75 cm. What is the circumference of the wheel?

Circumference = _____

8) A minute-hand of a clock is 22 ft long. Find the distance traveled by the tip of the minute-hand in one hour.

Circumference = _____