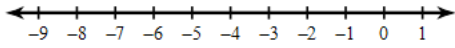


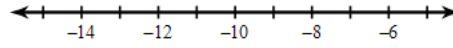
Solving Two-Step Inequalities

Solve each inequality and graph its solution.

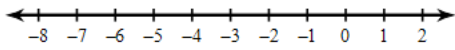
1) $\frac{n}{3} + 2 > 0$



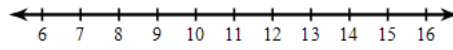
2) $\frac{p}{9} - 1 \leq -2$



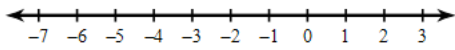
3) $\frac{x}{1} + 5 > 5$



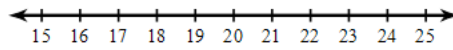
4) $\frac{1+m}{9} \geq 1$



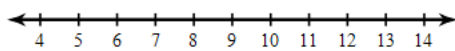
5) $-2r - 2 \leq 4$



6) $8x + 2 \leq 138$



7) $3 + \frac{b}{9} < 4$



8) $9 + \frac{n}{2} > 16$

