

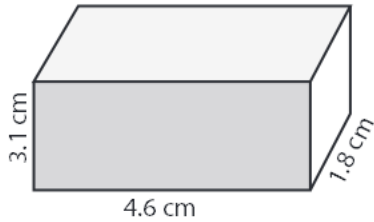
Name : _____

Score : _____

Volume - Rectangular Prism

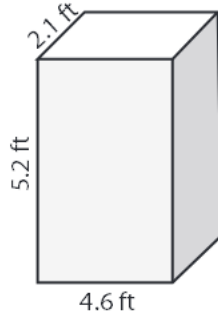
Find the volume of each rectangular prism. Round the answer to nearest tenth.

1)



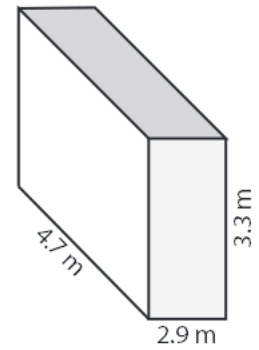
Volume = _____

2)



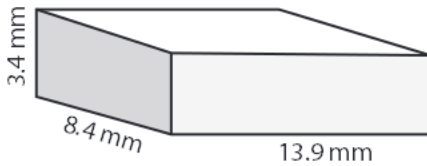
Volume = _____

3)



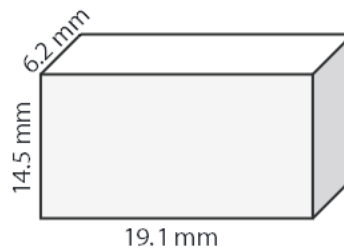
Volume = _____

4)



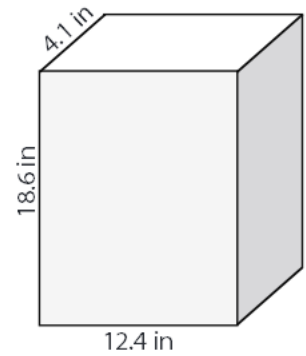
Volume = _____

5)



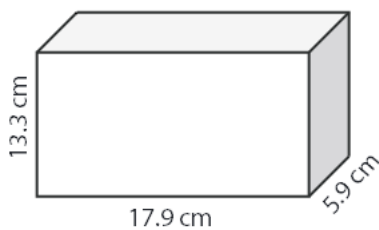
Volume = _____

6)



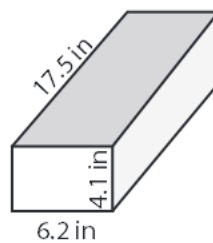
Volume = _____

7)



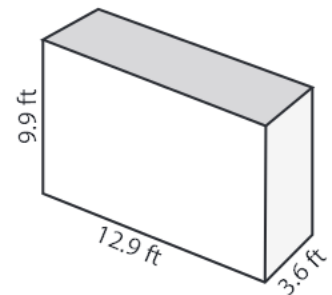
Volume = _____

8)



Volume = _____

9)



Volume = _____

10) A cargo container has a length of 14.6 meter, a width of 7.3 meter and a height of 7.3 meter. Find the volume of the container.

Volume = _____