

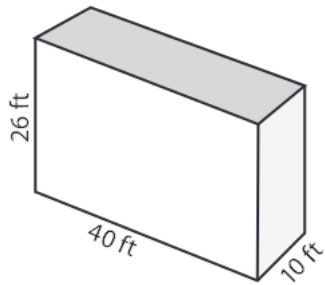
Name : \_\_\_\_\_

Score : \_\_\_\_\_

### Volume - Rectangular Prism

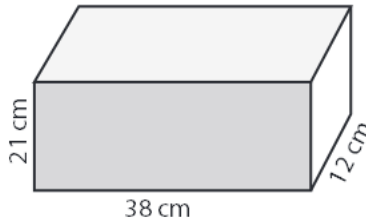
Find the volume of each rectangular prism.

1)



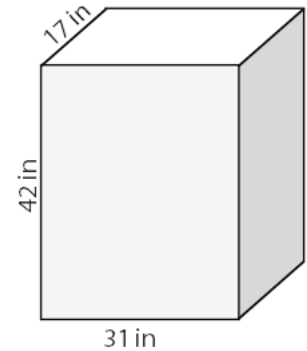
Volume = \_\_\_\_\_

2)



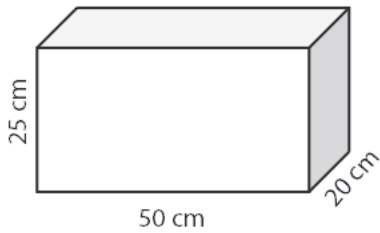
Volume = \_\_\_\_\_

3)



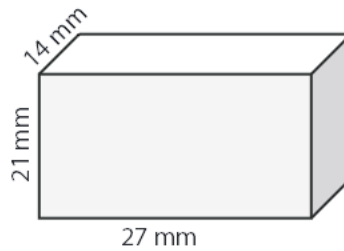
Volume = \_\_\_\_\_

4)



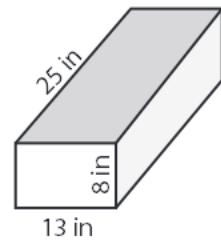
Volume = \_\_\_\_\_

5)



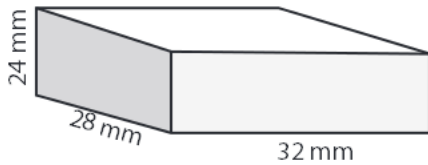
Volume = \_\_\_\_\_

6)



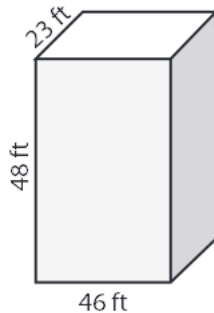
Volume = \_\_\_\_\_

7)



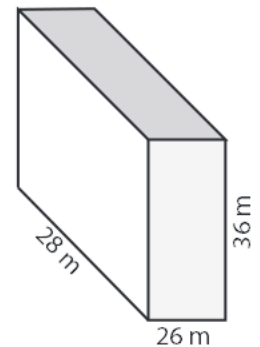
Volume = \_\_\_\_\_

8)



Volume = \_\_\_\_\_

9)



Volume = \_\_\_\_\_

10) A cooler has a length of 25 inches, a width of 19 inches and a height of 15 inches. How much ice would the cooler hold?

Volume = \_\_\_\_\_